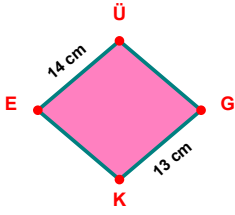
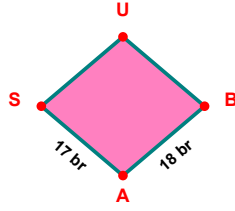


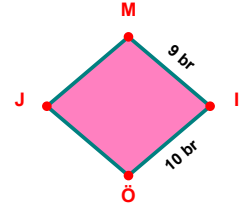
**SORU:** Aşağıdaki şekillerde verilen, kenar uzunlukları farklarını bulunuz.



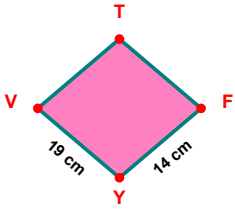
$$|EÜ| - |GK| = \dots\dots\dots$$



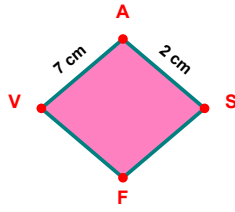
$$|BA| - |AS| = \dots\dots\dots$$



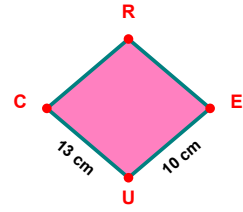
$$|IÖ| - |MI| = \dots\dots\dots$$



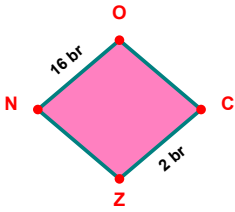
$$|YV| - |FY| = \dots\dots\dots$$



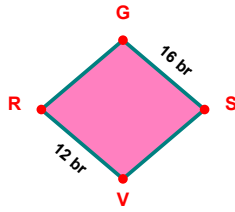
$$|VA| - |AS| = \dots\dots\dots$$



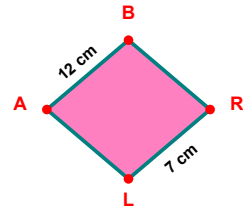
$$|UC| - |EU| = \dots\dots\dots$$



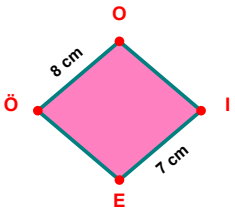
$$|NO| - |CZ| = \dots\dots\dots$$



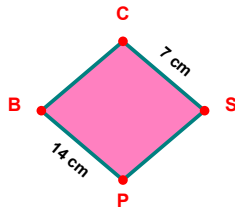
$$|GS| - |VR| = \dots\dots\dots$$



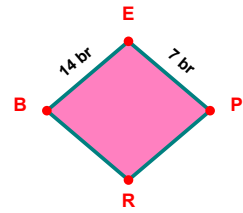
$$|AB| - |RL| = \dots\dots\dots$$



$$|ÖO| - |IE| = \dots\dots\dots$$

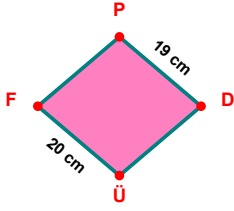


$$|PB| - |CS| = \dots\dots\dots$$

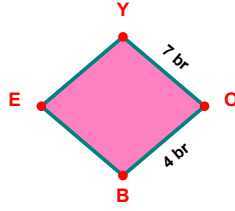


$$|BE| - |EP| = \dots\dots\dots$$

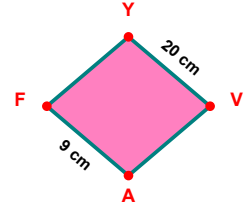
**SORU:** Aşağıdaki şekillerde verilen, kenar uzunlukları farklarını bulunuz.



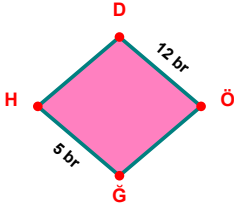
$$|ÜF| - |PD| = \dots\dots\dots$$



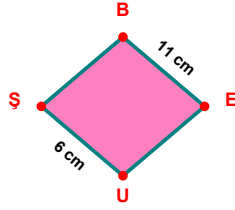
$$|YO| - |OB| = \dots\dots\dots$$



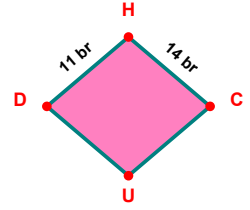
$$|YV| - |AF| = \dots\dots\dots$$



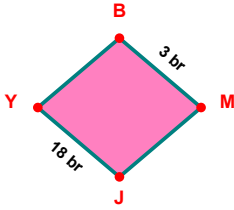
$$|DÖ| - |ĞH| = \dots\dots\dots$$



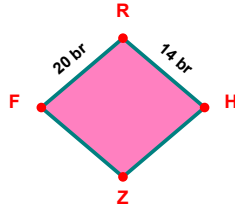
$$|BE| - |UŞ| = \dots\dots\dots$$



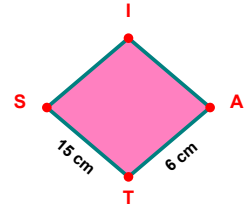
$$|HC| - |DH| = \dots\dots\dots$$



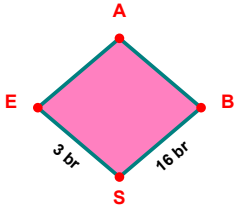
$$|JY| - |BM| = \dots\dots\dots$$



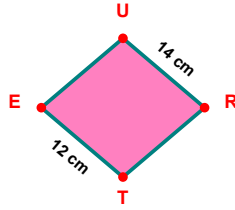
$$|FR| - |RH| = \dots\dots\dots$$



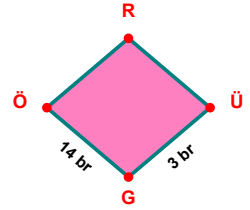
$$|TS| - |AT| = \dots\dots\dots$$



$$|BS| - |SE| = \dots\dots\dots$$



$$|UR| - |TE| = \dots\dots\dots$$



$$|GÖ| - |ÜG| = \dots\dots\dots$$

SÜREÇ ODAKLI DEĞERLENDİRME ÖLÇEĞİ

Doğru Sayısı: ..... / 24

Öğretmen ilgili kutucuğu işaretler.

Geliştirilmeli (0-8)

İyi (9-14)

Çok İyi (15-20)

Mükemmel (21-24)

☐☐☐☐

Hazırlayan: .....

Bu bölüme sınıfınızın ilgili kazanıma yönelik genel durumuna ilişkin gözlem ve izlenimlerinizi, öğrencilerinizin bu kazanımla ilgili öğrenme eksikliklerini ve bu eksikliklerin giderilmesi amacıyla yaptığınız/yapmayı planladığınız faaliyetleri not edebilirsiniz.

No	Adı - Soyadı	Toplam Puan	Değerlendirme
1			
2			
3			
4			
5			
6			
7			
8			
9			
10			
11			
12			
13			
14			
15			
16			
17			
18			
19			
20			
21			
22			
23			
24			
25			
26			
27			
28			
29			
30			
31			
32			
33			
34			
35			

Hazırlayan: .....